


1.

Count out 23 straws. How many bundles of 10 can you make?



There are \_\_\_ tens and \_\_\_ ones.

\_\_\_ tens + \_\_\_ ones = 23



2.

What number is represented in the grid?

Tens	Ones

There are \_\_\_ tens and \_\_\_ ones.

\_\_\_ tens + \_\_\_ ones = \_\_\_

3.

Match the pictures and words.

- Four tens and three ones
- Two tens and five ones
- Three tens and four ones
- Three ones and five tens

How many?

Four empty boxes for answers:

4.

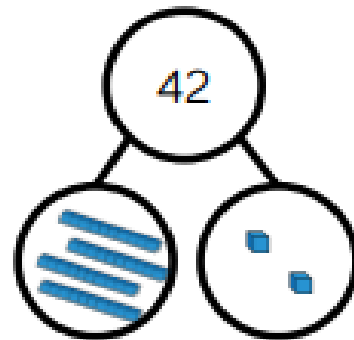
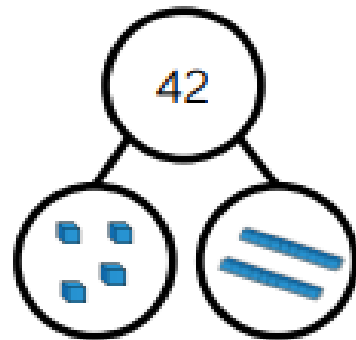
Dora and Amir both try to build the same number.



Dora



Amir



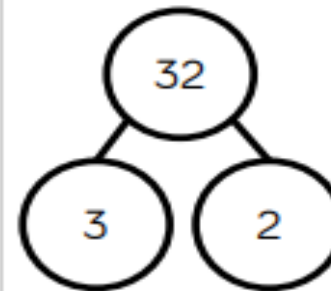
Who is correct?

Can you explain the mistake that has been made?

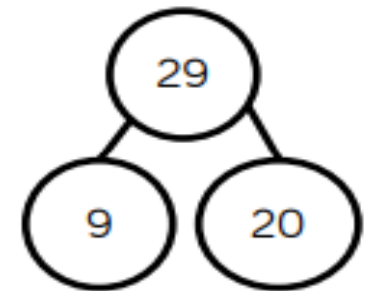
---

5.

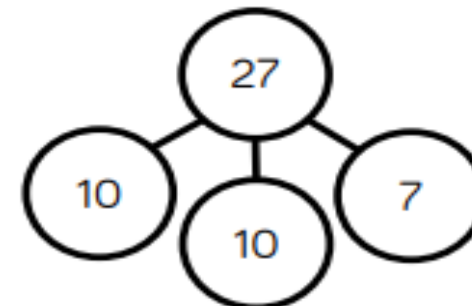
The children are completing the part whole models.



Tommy



Rosie



Jack

Are they correct?  
Explain why.